



1) Form sets then write the number :



.....




.....



.....

2) Form sets of the same color :



3) Choose :

1) Fifty =

(50 , 15)

2) Sunday , , Tuesday

(Friday , Monday)

3) 4 Tens , 8 ones =

(84 , 48)

4) $15 - 11 =$

(7 , 4)

5) $16 + 2 =$

(14 , 18)

6) 34 76

(< , >)

7) $10 - 4 =$

(14 , 6)

8) Six is..... than five.

(more , less)



9)



Balls are than oranges (more , less)

10) Seventeen 70 (> , <)

4) Complete :

1) 7 tens =

2) $4 + 13 =$

3) 10 , 20 , 30 , , , 60

4) 81 , , 83 , , , 86

5) 1 Day = hours .

6) Five , , Seven , Eight , , , Eleven

7) 90 , 80 , , 60 , 50 , , ,

8) The number after 35 \longrightarrow is

9) $8 - 8 =$

10) $15 + 5 =$

5) Circle the smallest number :

45 , 12 , 82 , 30

6) Circle the greatest number :

10 , 58 , 27 , 97



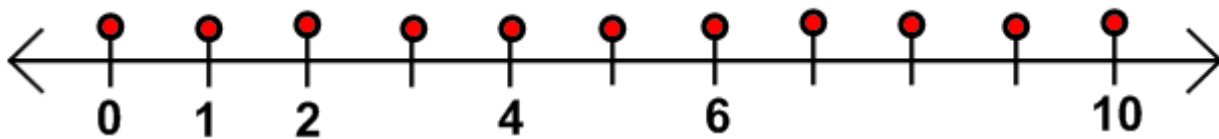
7) Circle the tens digit :

56 , 28 , 60 , 91


8) Circle the ones digit :

13 , 7 , 48 , 20

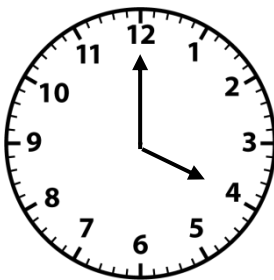
9) Complete the number line :



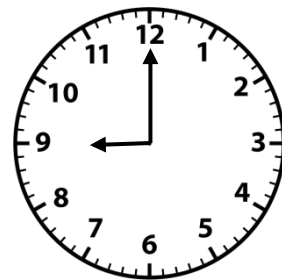
10) Write the time :



It's O' clock



..... :




It's O' clock


11) Draw the hands according to the given time :



10 : 00



8 : 00



5 : 00



12) Odd one out :



13) Put > , = , < :

- a) 45 50
- b) $8 + 8$ $10 + 6$
- c) Twenty 20
- d) $7 - 3$ $10 - 6$
- e) Forty one 14
- f) 9 tens 9
- g) 82 75
- h) 99 100
- i) $17 + 2$ $17 - 14$



14) Find the total money :



5 L.E

and



10 L.E

..... + =L.E



8 L.E

and



12 L.E

..... + =L.E

15) Find the money left :

I have



and I bought a



18 L.E

..... — = L.E

I have



and I bought



15 L.E

..... — = L.E

I have

19 L.E

and I bought a



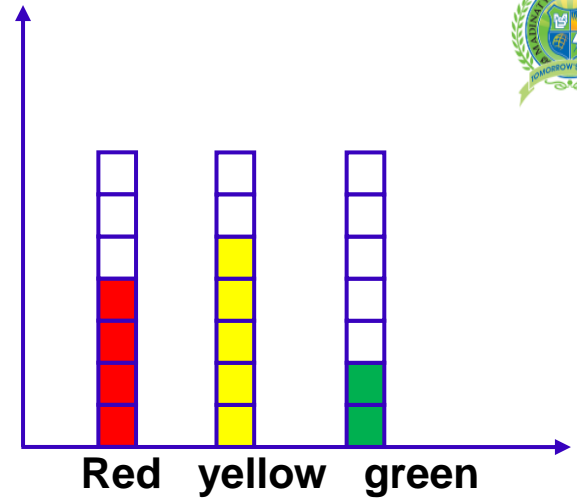
14 L.E

..... — = L.E



16) Complete:

The color	The number
Red
yellow.
Green



17) Color according to the number:

Toy	Number
Ball	4
Doll	3
Kite	6
Puzzle	5

